

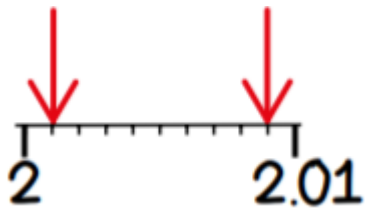
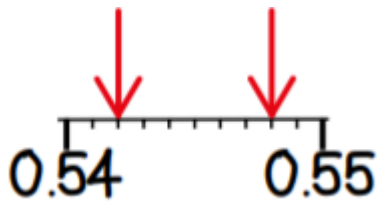
Term 5 Week 2 Questions

Session 3: Identifying and placing decimal numbers on a number line

*Can you do it?*

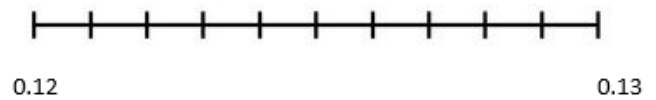


Identify the number the arrows are pointing to:

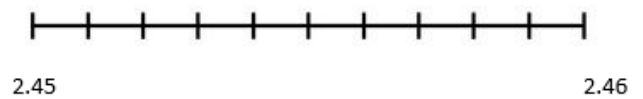


Plot these numbers on the number lines:

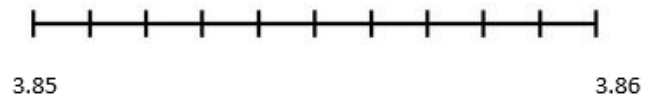
0.125



2.455



3.851



0.004

